



Five Little Ducks and Ponds Number Bonds of 5 Activity


Can you complete the number sentences?



$$\boxed{4} + \boxed{} = \boxed{}$$




$$\boxed{2} + \boxed{} = \boxed{}$$



$$\boxed{} + \boxed{2} = \boxed{}$$




$$\boxed{} + \boxed{} = \boxed{}$$




$$\boxed{} + \boxed{} = \boxed{}$$

Five Little Ducks and Ponds Number Bonds of 5 Activity


Can you complete the number sentences?




$$\boxed{4} + \boxed{} = \boxed{}$$




$$\boxed{2} + \boxed{} = \boxed{}$$



$$\boxed{} + \boxed{2} = \boxed{}$$



$$\boxed{} + \boxed{} = \boxed{}$$



$$\boxed{} + \boxed{} = \boxed{}$$